

FRACTIONS


Monday 20th April 2020

Today you will be re-capping **unit fractions**. Here's a quick reminder of what we already know:

Remember our stem sentence: *The whole is divided into ___ equal parts, ___ parts are shaded.*

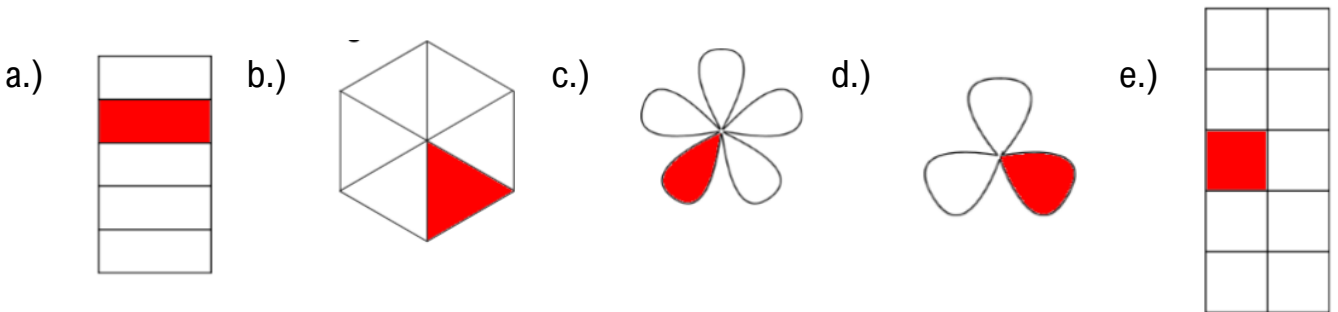
$\frac{1}{4}$
 1 → Numerator
 4 → Denominator

The whole is split into 4 equal parts, 1 part is shaded

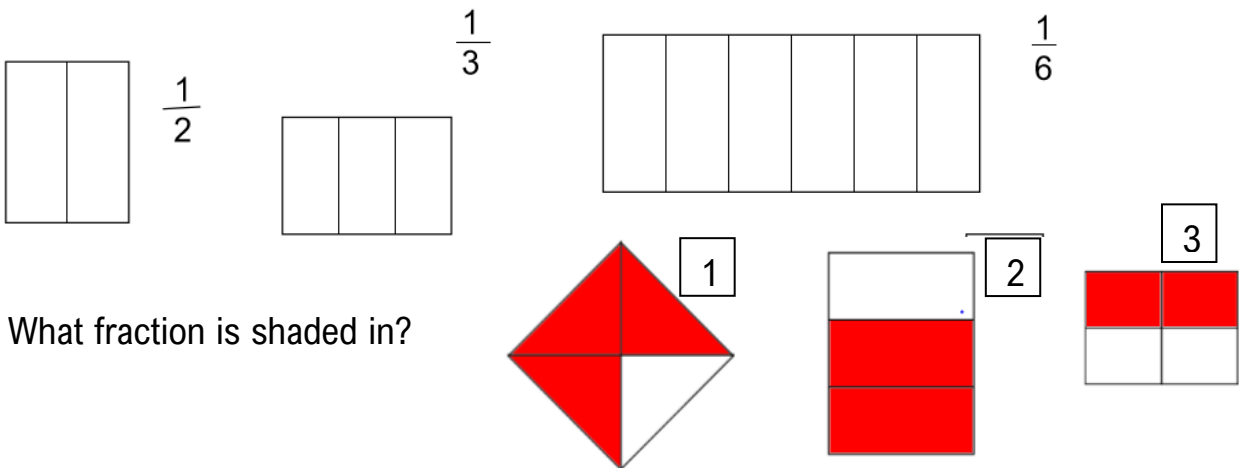


Write the answers in your books (you do not have to print this)

1.) Write down what fraction of the whole is shaded.



2.) Draw these shapes and colour in these fractions



3.) What fraction is shaded in?

Challenge: How many different ways can you represent one half?

