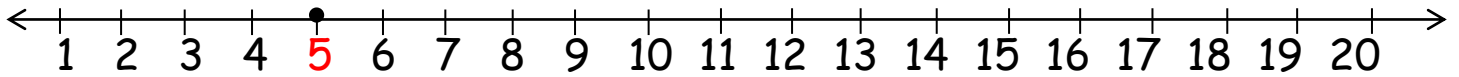


3.02.2021

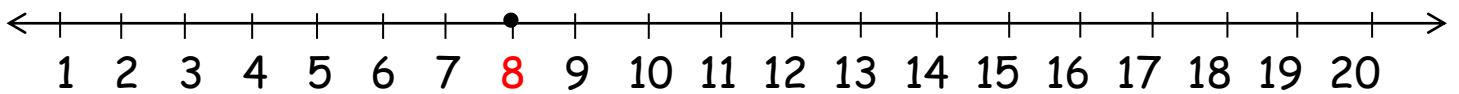
Use the numberline to find the missing numbers in subtraction sums



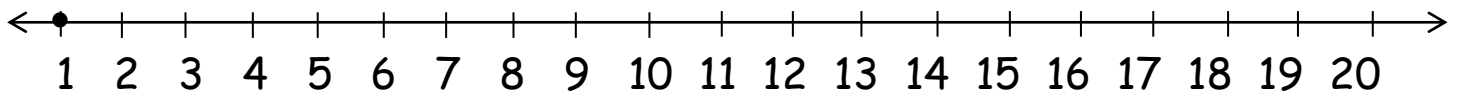
$$5 - \underline{\quad} = 2$$



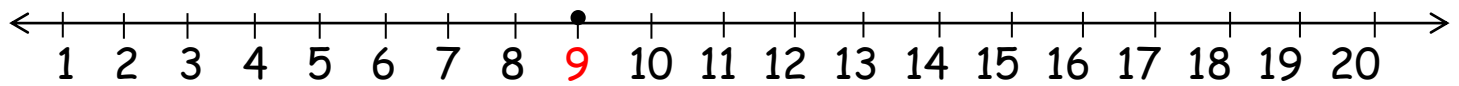
$$7 - \underline{\quad} = 14$$



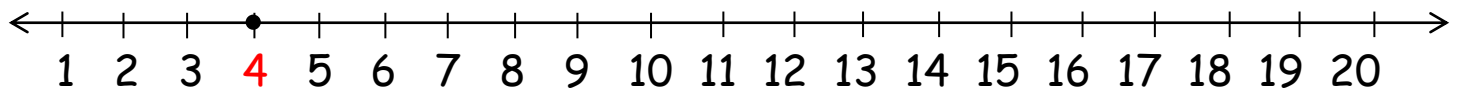
$$16 - \underline{\quad} = 13$$



$$\underline{\quad} - 2 = 7$$



$$\underline{\quad} - 3 = 11$$



$$\underline{\quad} - 6 = 14$$

