

# Wednesday – division word problems


Today you have a mixture of sharing and grouping word problems. Can you **draw out** what the question is asking in your books and then write the number sentence.

1. Mohamed has 14 pencils. He puts 2 pencils in each pot. How many pots does he need?




$$14 \div 2 = 7 \text{ pots}$$

2. Miss Ellison-Smith has 10 rubbers. She shares them between 10 children. How many rubbers does each child get?



$$10 \div 10 = 1$$

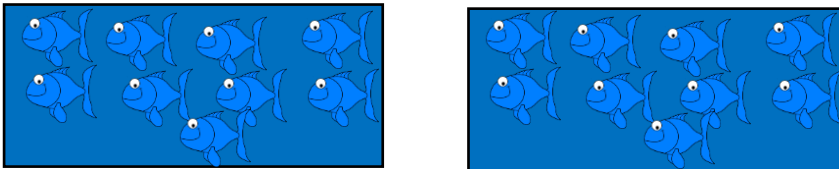
3. A squirrel has 15 nuts. He puts 5 nuts in each hole. How many holes does he have?



$$15 \div 5 = 3 \text{ holes}$$


4. A pet shop owner has 18 fish. He shares them between 2 tanks. How many fish are in each tank?

5.



$$18 \div 2 = 9$$

6. Kimi has 12 sweets. She shares them between herself and her two friends. How many sweets do they get each?



$$12 \div 3 = 4$$