


1. What is a rectilinear shape?

A rectilinear shape is a shape that...

2. Odd one out.

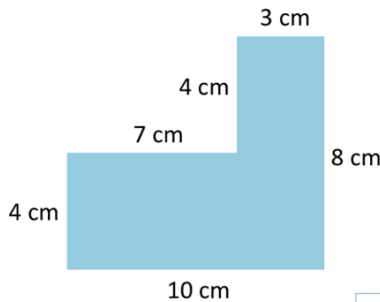
a) Which of these shapes is the odd one out? *The odd one out is...*



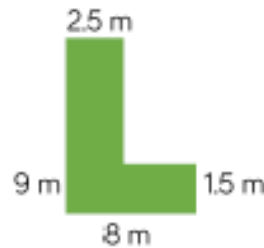
a) Explain why. *This shape is the odd one out because it...*

3. Calculate the perimeter of the following shapes:

a)

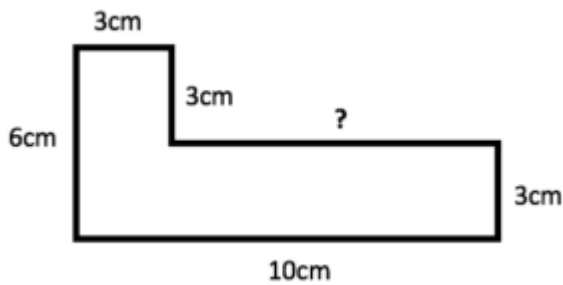


b)

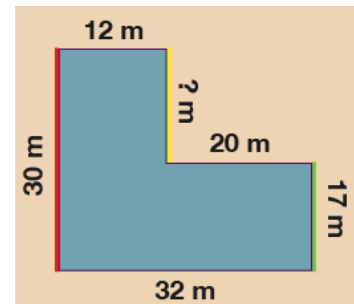


4. Now calculate the perimeters of these shapes with missing lengths:

b)



b)

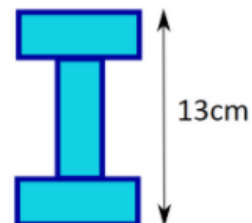


5. How many rectilinear shapes can you make with a perimeter of 24 cm?

Draw them in your books. Make sure you use a ruler and label the lengths!

Level 2

Work out the perimeter of one small rectangle



Level 2

Level 3

A rectangle has width twice (double) its height.

If the perimeter is 12 cm, what are the dimensions of the rectangle?

Level 3