



1) Complete the following calculation:

Hundreds	Tens	Ones

+ = \_\_\_\_\_

Hundreds	Tens	Ones

+ = \_\_\_\_\_

Hundreds	Tens	Ones

- = \_\_\_\_\_

2) Complete the following equation in your book:

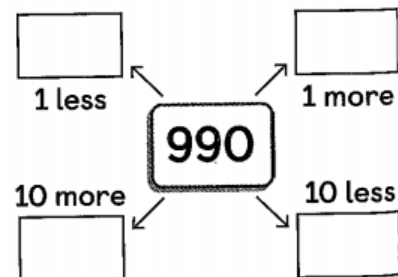
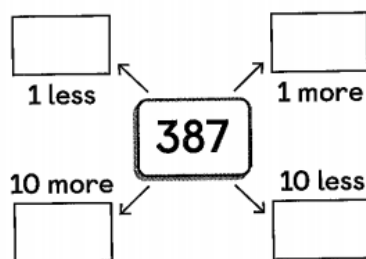
a) 10 less than 956

b) 10 more than 309

c) 10 more than 618

d) 10 less than 700

3) Fill in the blanks:



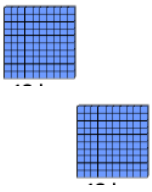
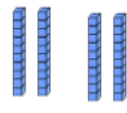

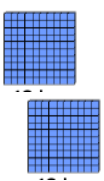

4) Miss Ellison-Smith thinks of a number.


She then adds 10 and takes away 1.


She is left with 576

What number did she start with??

5) Complete the following calculations:

Hundreds	Tens	Ones
		
Hundreds	Tens	Ones
		

+  = \_\_\_\_\_

-  = \_\_\_\_\_

6) Fill in the blanks.

925		725	625		
135			435		635

7) Complete the following calculations in your book:

- a) 100 less than 478
- b) 100 more than 666
- c) 100 more than 179
- d) 100 less than 167

8) Miss Mahmood says: When you add 100 the tens column changes.

Miss Ellison-Smith says: When you add 100 the column changes.

Who do you agree with? Write a calculation to prove your answer.

Use these words in your answer: always, sometimes, never