

1. Which two numbers could have a total of 15?
2. Which three numbers could have a sum of 23?

3. Write the next five sums in this pattern:


$$30 - 10 - 0 = 20$$

$$30 - 9 - 1 = 20$$

$$30 - 8 - 2 = 20$$

4.


Ride at the fair



Lucy had a ride at the fair.
Her Mum asked Lucy to pay less than 20p towards it.


Lucy paid exactly three coins towards the ride.
How much did Lucy pay her Mum?

Find different ways to do it.



Sum up

Choose from these four cards.



Make these totals:

- 9
- 10
- 11
- 12
- 13
- 14
- 15

What other totals can you make from the cards?



Log onto Times Tables Rock Star.

A Tournament is set for today between Swallow and Swift. You have all day to indulge. Make sure that you have breaks but do your best.

We will be checking to see who logs on and how well you do!