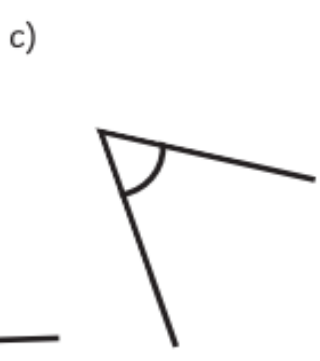
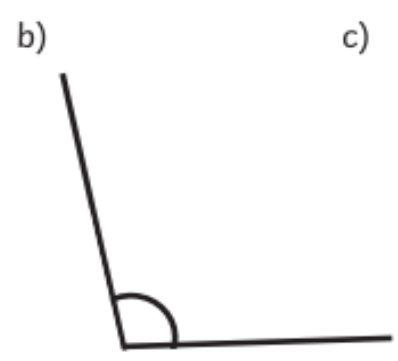
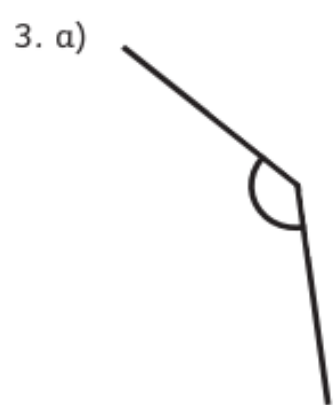
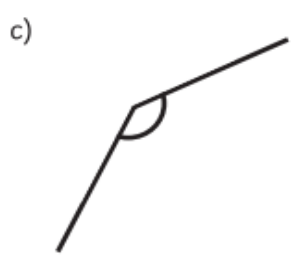
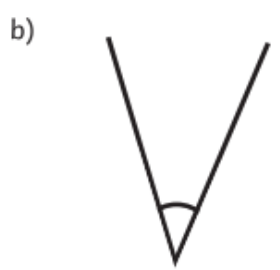
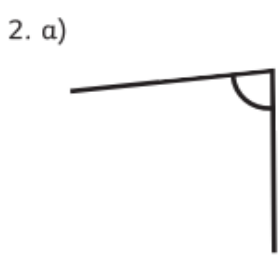
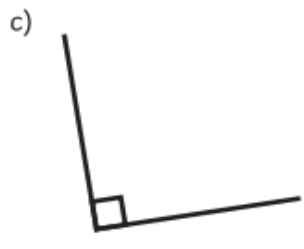
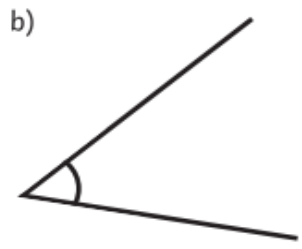
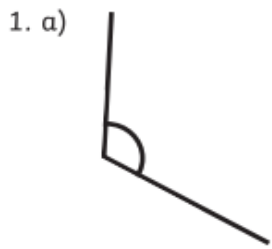


Thursday 25<sup>th</sup> June 2020

Compare and Order Angles

Order these angles from smallest to largest. Write them in order. The first one is done for you! 1. b, c, a

2. ....



If 'e' is the second smallest, what would it look like? Draw it!

5. a)



b)



c)



d)



e)

	e			
--	---	--	--	--

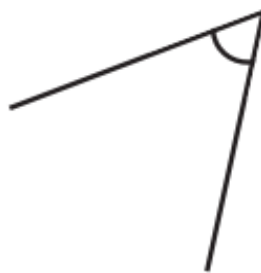
6. a)



b)



c)



d)



e)

				e
--	--	--	--	---

7. a)



b)



c)



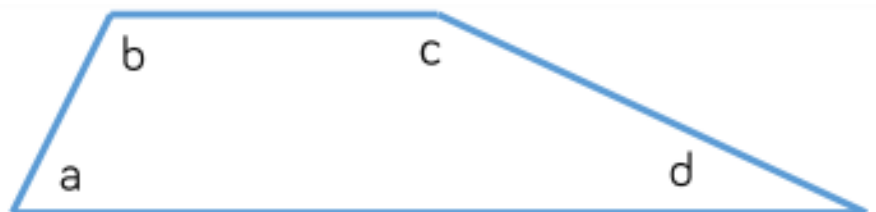
d)



e)

	e			
--	---	--	--	--

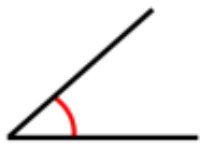
8. Copy and complete the statements below



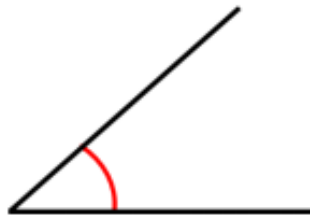
a) Angle \_\_\_\_\_ is smaller than angle \_\_\_\_\_.

b) Angle \_\_\_\_\_ is larger than angle \_\_\_\_\_.

CHALLENGE:



Angle A



Angle B



Ron

Angle B is bigger than Angle A because it has longer sides.

Do you agree with Ron? Explain your thinking.