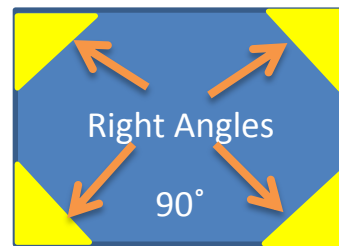



Identifying Angles

We are going to revise and build on your knowledge of angles.

Do you remember these names and descriptions? I hope so!



Less than 90° = acute	More than 90° but less than 180° = obtuse	More than 180° = reflex
---------------------------------	---	-----------------------------------


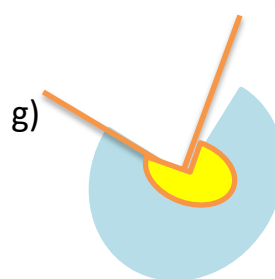
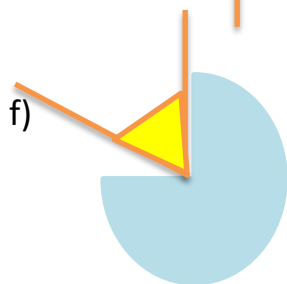
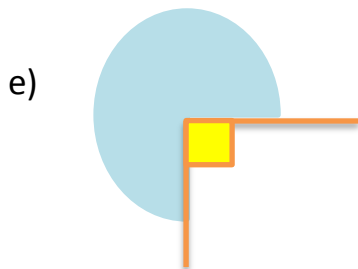
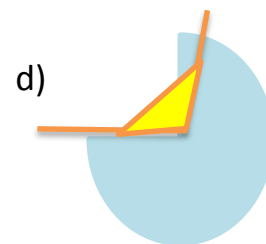
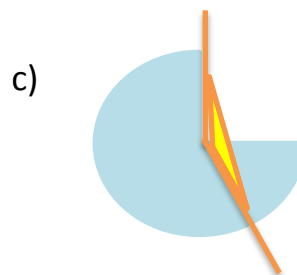


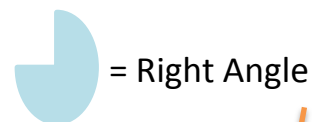


Acute angles are smaller than Right Angles.
Acute = smaller

Obtuse angles are bigger than Right Angles.
Obese = bigger

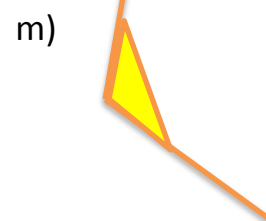

Reflex angles are bigger than Obtuse Angles.
???

1. Identify these angles. The first one has been done for you!



i) 197°

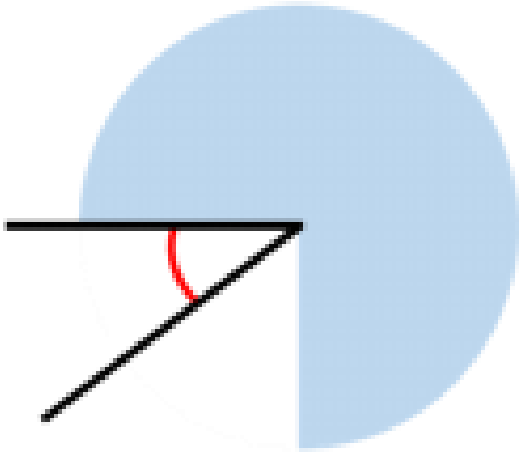
k) 54°



a) = acute

b) = ...

CHALLENGE:



I know the angle is not obtuse.



Teddy



Alex

I know the angle is acute.

I think the angle is roughly 45° .



Whitney

Who is correct?
Explain your reasons.