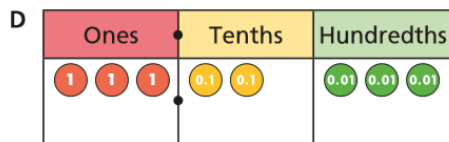
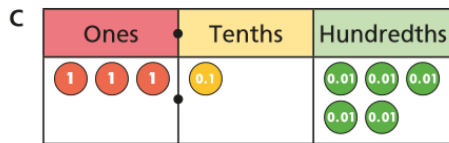
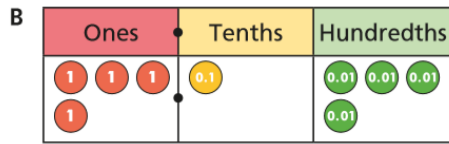
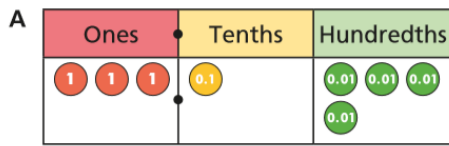


Thursday 14th May 2020

Maths: Ordering Decimals

1.) Write the decimal represented in each Place Value chart



b) Put them in ascending order.

2.) Write these numbers in descending order



3.) Use the symbols $>$ and $<$ to compare these decimals

a) 3.2 3.8 3.9

b) 0.41 0.38 0.25

c) 4.2 4.17 4.085

4.) Write these numbers in ascending order


a) 2.38 0.97 1.45 1.81

b) 0.64 0.7 0.09 0.46

c) 12.3 2 7.83 0.99

CHALLENGES

LEVEL 2: A group of children have measured their heights. Put them in order from shortest to tallest.



LEVEL 3: Can you find more than one way to complete each list?

Here are two lists of numbers.

Use the digits 0 to 9 once each to complete the lists.

ascending order $__.4__$ $__.41$ $7.__9$ $__.41$

descending order $__.41$ $7.__9$ $__.41$ $__.4__$