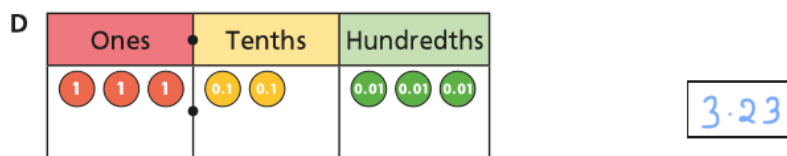
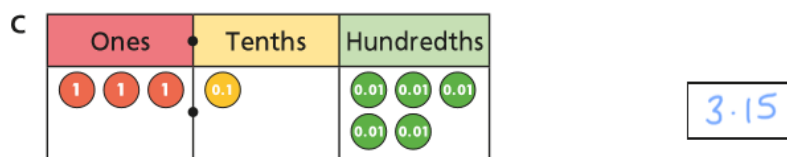
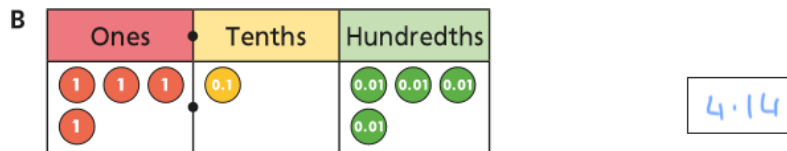
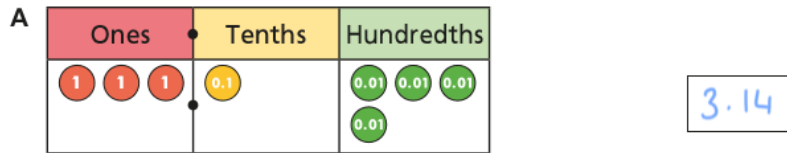


Thursday 14<sup>th</sup> May 2020

Maths: Ordering Decimals **ANSWERS**


a) What number is represented in each place value chart?



b) Write the numbers in ascending order.

3.14, 3.15, 3.23, 4.14

2.) Write the numbers in descending order.



4.12, 2.41, 1.42, 1.24

3.)

a) 3.2 < 3.8 < 3.9

b) 0.41 > 0.38 > 0.25

c) 4.2 > 4.17 > 4.085

- 4.) a) 2.38   0.97   1.45   1.81  
0.97, 1.45, 1.81, 2.38
- b) 0.64   0.7   0.09   0.46  
0.09, 0.46, 0.64, 0.7
- c) 12.3   2   7.83   0.99  
0.99, 2, 7.83, 12.3

#### CHALLENGES

Dora, Ron, Tommy, Eva, Amir

ascending order   0.41   2.41   7.39   9.41

descending order   8.41   7.49   6.41   5.47