

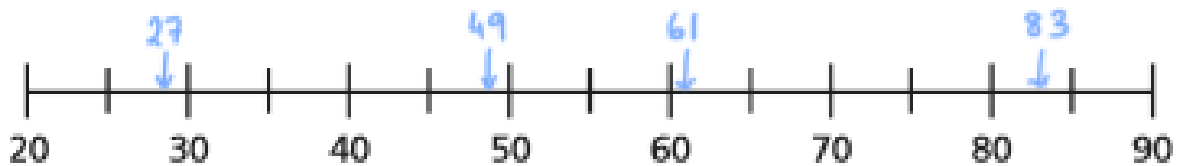
Monday 18th May

LO: Rounding decimals. **ANSWERS**

Here are some number cards.



a) Draw arrows to estimate the position of the numbers on the number line.



b) Use the numbers to complete the sentences.

49 is closer to 50 than 40

27 is closer to 30 than 20

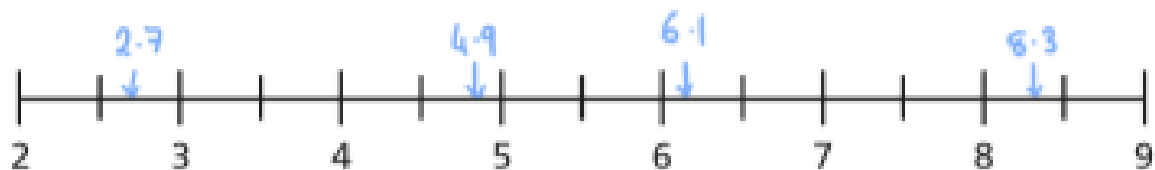
83 is closer to 80 than 90

61 is closer to 60 than 70

Here are some number cards.



a) Draw arrows to estimate the position of the numbers on the number line.



b) Use the numbers to complete the sentences.

4.9 is closer to 5 than 4

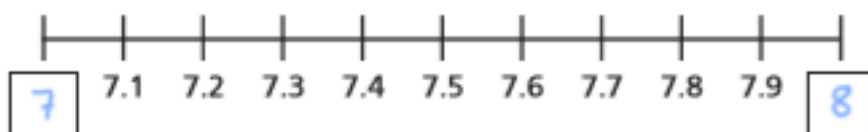
2.7 is closer to 3 than 2

8.3 is closer to 8 than 9

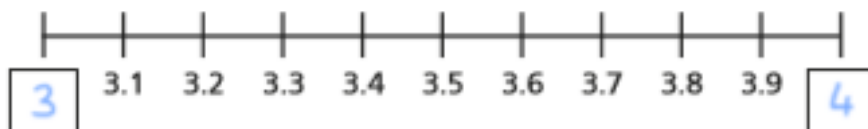
6.1 is closer to 6 than 7

Fill in the integers on the number lines.

a)



b)



Which integers do the numbers lie between?

Fill in the boxes to make the statements correct.

a) $1 < 1.4 < 2$

b) $34 < 34.8 < 35$

c) $0 < 0.7 < 1$

Round each decimal to the nearest whole number.

a) 1.8

e) 13.7

b) 4.2

f) 20.1

c) 0.9

g) 0.4

d) 1.5

h) 99.8