

Wednesday 20<sup>th</sup> May

LO: Pounds and pence

1.) How much money is there?



p



£

2.) How much money is there?



- a)
- There is  pounds.
- There is  pence.
- There is £  and  p.
- There is £

b) Make the same amount of money using different coins.

3.) Match the amounts that are equal and fill in the missing gaps

460p	£__ and __p	£4.62
420p	£4 and 62p	£4.06
__p	£4 and 6p	£4.20
462p	£4 and 20p	£. .
426p	£4 and 26p	£4.60

## CHALLENGE

Kim has four coins.

- The coins add to a multiple of 10
- The total amount is more than £1
- All the coins are silver.
- The total is less than £1.50


a) Which four coins could Kim have?

Mo has this money.




Decide whether Mo's statements are true (T) or false (F).


Circle your answer and give a reason for your choice.

a)  You can make an amount greater than £11 T    F

---

b)  You can make exactly £1.50 using three coins. T    F

---

c)  You can make exactly £2.02 using four coins. T    F