


Friday 8th January 2021

LO: To add equal groups.

Xzqa1xzq1ax

1. Write the word sentences and number sentences represented in the picture.







There are _____ equal groups of _____
 _____ + _____ + _____ + _____ = 8

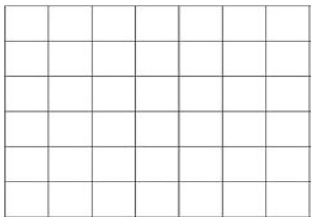


There are _____ equal groups of _____
 _____ + _____ + _____ = 15

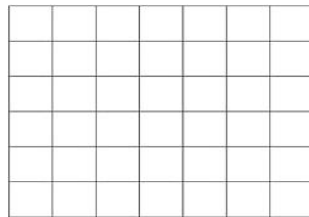
2. Complete the table.

Picture	Say it	Add it
	There are 3 equal groups of 5 There are 3 lots of 5	$5 + 5 + 5 = 15$
	There are _____ lots of _____	_____ + _____ = _____
		
		
	There are 3 lots of 2	$2 + 2 + 2 = 6$

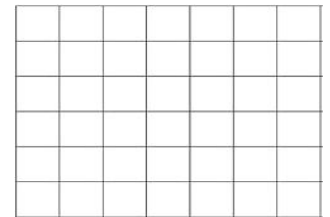
3. Work out the total of these number sentences. Draw pictures to help you if you need to.



$6 + 6 + 6 + 6 = \underline{\quad}$



$4 + 4 + 4 + 4 + 4 = \underline{\quad}$




$3 + 3 + 3 = \underline{\quad}$

4. Work out the answer to this word problem.

Every bag has 5 cookies in them. There are 7 bags.
 How many cookies are there altogether?

Show your working out.



5. Who do you agree with?

Ahmed

The pictures shows 4 lots of 2



Chelsea


The picture shows $2+2+2+2=8$

I agree with _____ because...


Friday 8th January 2021

LO: To add equal groups.

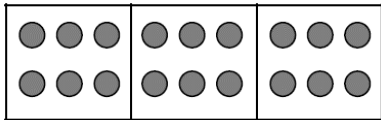
1. Write the word sentences and number sentences represented in the picture.




There are _____ equal groups of _____
 _____ + _____ + _____ + _____ = 8



There are _____ equal groups of _____
 _____ + _____ + _____ = 15



There are _____ equal groups of _____
 _____ + _____ + _____ = 18

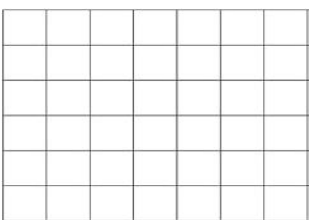


There are _____ equal groups of _____
 _____ + _____ = 20

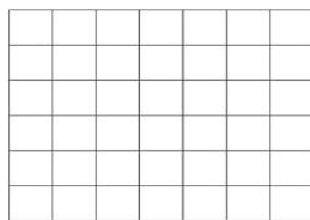
1. Complete the table.

Picture	Say it	Add it
	There are 3 equal groups of 5 There are 3 lots of 5	$5 + 5 + 5 = 15$
	There are _____ equal groups of _____	_____ + _____ = _____
	There are _____ equal groups of _____	
	There are _____ equal groups of _____	

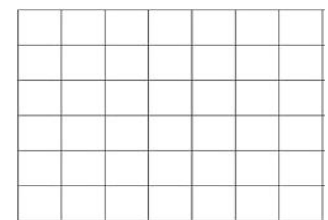
2. Work out the total of these number sentences. Draw pictures to help you if you need to.



$2 + 2 + 2 = \underline{\quad}$



$5 + 5 = \underline{\quad}$



$3 + 3 + 3 = \underline{\quad}$

3. Work out the answer to this word problem.

Every bag has 5 cookies in them. There are 4 bags.
 How many cookies are there altogether?
 Show your working out.



Friday 8th January 2021

LO: To add equal groups.

Work out the answers to these word problem. Show your working out.



Miss Ramsay has 8 lots of 5 gold stickers.

Mr Webster has 3 lots of 10 gold stickers

Miss Burnett has 2 lots 32 gold stickers.

How many does Miss Ramsay and Mr Webster have **altogether**? _____

How much does Mr Webster and Miss Burnett have **altogether**? _____

What is the **difference** between Mr Webster's and Miss Burnett's stickers? _____

How much more does Miss Burnett have than Miss Ramsay? _____

Compare these using > < or =

2 lots of 5 5 lots of 2

3 lots of 4 4 + 4 + 4 + 4

5 + 5 + 5 3 + 3 + 3

6 lots of 2 2 + 2 + 2 + 2 + 2 + 2

4 groups of 5 10 + 10

10 + 10 + 10 6 equal groups of 5

6 + 6 + 6 9 + 9

9 + 9 + 9 7 + 7 + 7 + 7



How many ways can you find to complete the number sentence?

4 lots of 10 = _____