
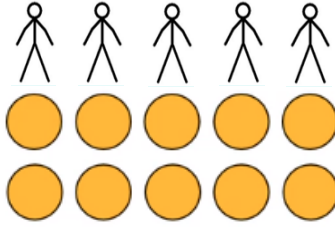


LO: To divide by 5

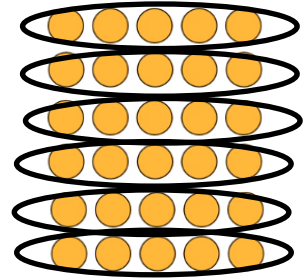
Write the number sentence represented for each



$$\underline{\quad} \div 5 = \underline{\quad}$$



$$\underline{\quad} \div 5 = \underline{\quad}$$



$$\underline{\quad} \div 5 = \underline{\quad}$$

Complete the division number sentences. Draw pictures grouping or sharing to help you if you need to.

$$25 \div 5 = \underline{\quad}$$

$$15 \div 5 = \underline{\quad}$$


$$20 \div 5 = \underline{\quad}$$

$$35 \div 5 = \underline{\quad}$$

$$45 \div 5 = \underline{\quad}$$

$$50 \div 5 = \underline{\quad}$$

What number is hidden behind the splash? Explain or show how you know.



$$\div 5 = 3$$

### Word Problem

A car can fit 5 people in.

How many cars would we need to fit 25 people?

$$\underline{\quad} \div \underline{\quad} = \underline{\quad}$$



Can you compare these number sentences? Look closely at the signs!

Level  
2

$$55 \div 5 \bigcirc 5 \times 2$$

$$50 \div 5 \bigcirc 20 \div 2$$

$$5 \div 5 \bigcirc 5 \times 0$$

How many division number sentences can you find that equal the same?

Level  
3

$$5 \times 2 = \underline{\quad} \div \underline{\quad}$$