


04.03.20


LO: To draw a pictogram


Children record their favourite sports in a tally chart




Sport	Tally	Total
Tennis		5
Football		20
Netball		10

Sport	
Tennis	
Football	
Netball	

Key
 = 5 votes

Sport	
Tennis	
Football	
Netball	

Key
 = 10 votes


1) What's the same and what's different about the pictograms for this tally chart?

They are the same because... They are different because...

2) Complete the pictograms for the tally chart. Be careful and remember the key!

3) Hockey was also tallied and each pictogram showed this:

hockey	
--------	---

hockey	
--------	--

How many people voted hockey as their favourite sport?

Draw your own pictogram for this tally chart.



Weather	Tally
Sun	
Cloud	
Rain	

Can you draw it again with a different key?

04.03.20

LO: To draw a pictogram

Use the tally charts to complete the pictograms. Remember to look closely at the key!

Name	Tally
Teddy	
Annie	
Amir	
Whitney	












Teddy	Annie	Amir	Whitney

Key


 = 2 goals

How many books read by each class

Class 1	
Class 2	
Class 3	
Class 4	
Class 5	
Class 6	

Class 1	 
Class 2	   
Class 3	 
Class 4	  
Class 5	
Class 6	

Key

 = 5 books

Cakes Sold at the School Fair

Chocolate	
Lemon	
Red Velvet	
Mint	
Carrot	



















Chocolate
Lemon
Red Velvet
Mint
Carrot

Key


___ = 10 cakes

Mickey drew this pictogram for this tally of another cake sale.

Spot the mistake.
The mistake is...

Chocolate		Chocolate	 
Lemon		Lemon	   
Red Velvet		Red Velvet	  
Mint		Mint	    
Carrot		Carrot	   






Key

 = 10 cakes

04.03.20






LO: To draw a pictogram


Can you draw the pictogram correctly now?

Chocolate		Chocolate	
Lemon		Lemon	
Red Velvet		Red Velvet	
Mint		Mint	
Carrot		Carrot	






Key	
	= 10 cakes


Can you draw the pictogram correctly now?

Chocolate		Chocolate	
Lemon		Lemon	
Red Velvet		Red Velvet	
Mint		Mint	
Carrot		Carrot	






Key	
	= 10 cakes


Can you draw the pictogram correctly now?

Chocolate		Chocolate	
Lemon		Lemon	
Red Velvet		Red Velvet	
Mint		Mint	
Carrot		Carrot	

Key	
	= 10 cakes

Can you draw the pictogram correctly now?

Chocolate		Chocolate	
Lemon		Lemon	
Red Velvet		Red Velvet	
Mint		Mint	
Carrot		Carrot	

Key	
	= 10 cakes

04.03.20

LO: To draw a pictogram

Pictogram Template

Key
___ = _____

Pictogram Template

Key
___ = _____

Pictogram Template

Key
___ = _____

Pictogram Template

Key
___ = _____

Pictogram Template

Key
___ = _____

Pictogram Template

Key
___ = _____