

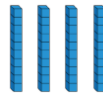
Monday 11th January 2021

LO: To add equal groups.

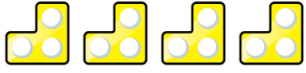
1. Write the number sentences represented by the pictures and work out the total.



___ + ___ + ___ = ___



___ + ___ + ___ + ___ = ___









2. Work out the total of these number sentences. Draw pictures to help you if you need to.

$2 + 2 + 2 + 2 + 2 =$ _____

$10 + 10 =$ _____

$8 + 8 =$ _____

$4 + 4 + 4 =$ _____

$7 + 7 + 7 =$ _____

$6 + 6 + 6 + 6 =$ _____

$10 + 10 + 10 + 10 + 10 =$ _____

3. Now try these. Hint: You may want to write the addition number sentence to help you!

4 equal groups of 2 = _____

Two 5s = _____

2 lots of 6 = _____

Six 10s = _____

5 lots of 5 = _____

4. Work out this word problem.

I have 50 sweets altogether. There are 5 sweets in each bag.
How many bags do I have?



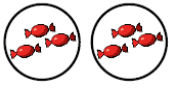
5. Which is the odd one out? I think _____ is the odd one out because...

A	B	C	D
$5+5+5+5+5+5$	$10+10+10$	6 5s	4 lots of 10


Monday 11th January 2021

LO: To add equal groups.

1. Write the number sentences represented by the pictures and work out the total.




___ + ___ = ___



___ + ___ + ___ = ___



___ + ___ + ___ = ___




___ + ___ + ___ + ___ = ___

Now try these:













2. Work out the total of these number sentences. Draw pictures to help you if you need to.

$10 + 10 =$ _____

$2 + 2 =$ _____

$5 + 5 =$ _____

$8 + 8 =$ _____

$4 + 4 + 4 =$ _____

$6 + 6 + 6 =$ _____

$10 + 10 + 10 + 10 + 10 =$ _____

3. Which is the odd one out? I think _____ is the odd one out because...

A	B	C
	4 lots of 5	$5+5+5$

Monday 11th January 2021

LO: To add equal groups.

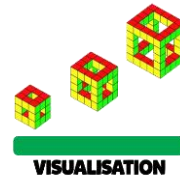
True or false?

$$5 + 5 = 2 + 2 + 2 + 2 + 2$$

Draw an image or use cubes to prove you are correct.



How many different ways can you represent 4 lots of 5?



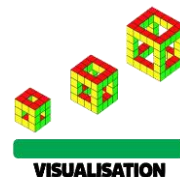
True or false?

$$5 + 5 = 2 + 2 + 2 + 2 + 2$$

Draw an image or use cubes to prove you are correct.



How many different ways can you represent 4 lots of 5?



True or false?

$$5 + 5 = 2 + 2 + 2 + 2 + 2$$

Draw an image or use cubes to prove you are correct.



How many different ways can you represent 4 lots of 5?

