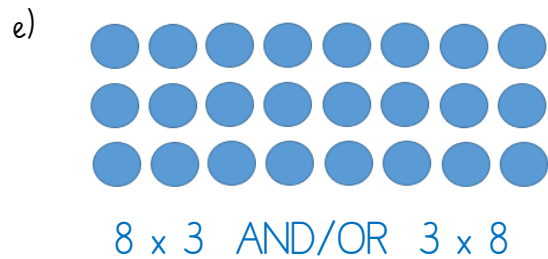
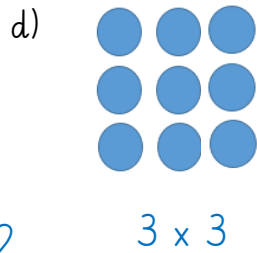
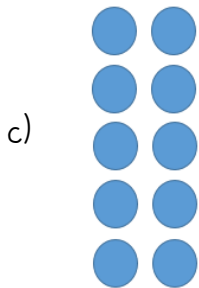
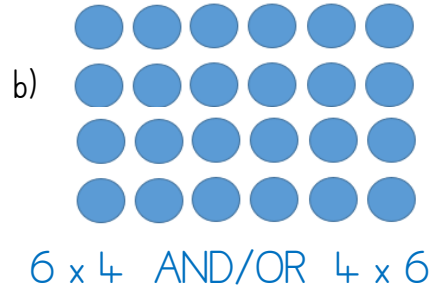


Wednesday

What numbers sentences are represented in these arrays?



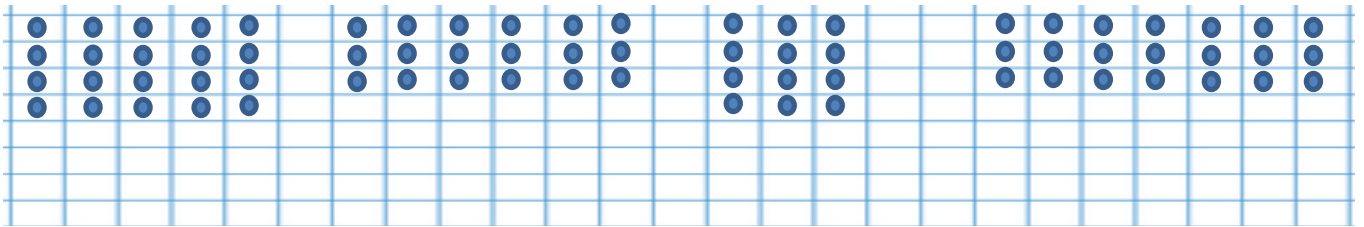
2×5 AND/OR 5×2

$$5 \times 4 = 20$$

$$6 \times 3 = 18$$

$$3 \times 4 = 12$$

$$7 \times 3 = 21$$



Who do you agree with and why? I agree with both Miss Ellison-Smith and Miss Burnett because the number sentences are the same but turned around and if you turned the array around it can show both.

