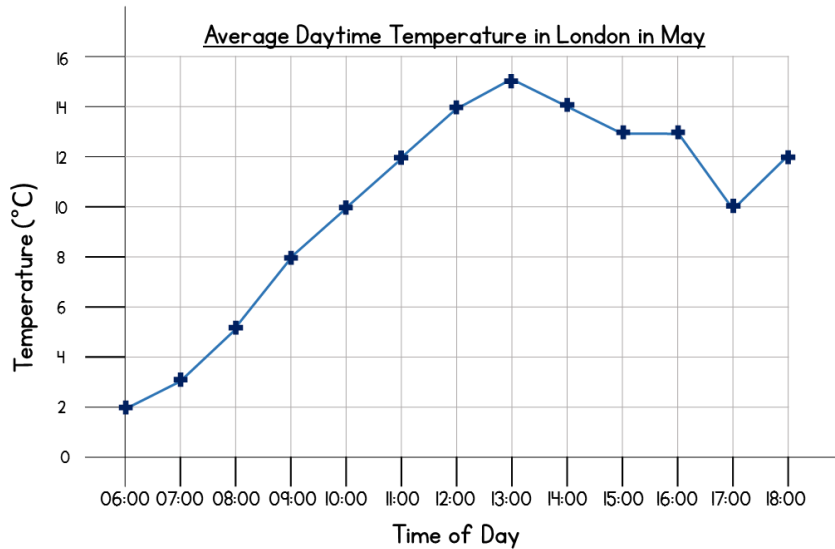


Name _____

1 The line graph shows the average temperature in London.



At what time was the temperature the highest?

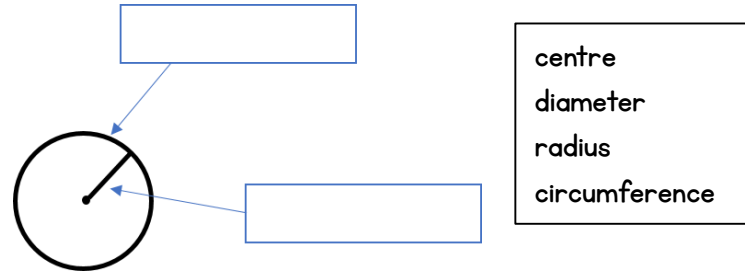
1 mark

How many degrees warmer was it at 4pm than 9am?

2 marks

_____ °C

2 Use words from the box to label the parts of the circle.



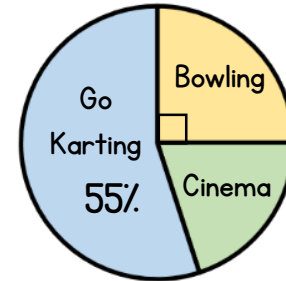
2 marks

3 A 2 pence coin has a diameter of 26 mm.
What is the length of the radius of a 2 pence coin?

_____ mm

1 mark

4 20 children were asked where they would like to go on a trip. The pie chart shows the results.



What percentage of children chose bowling?

1 mark

What percentage of children chose the cinema?

2 marks

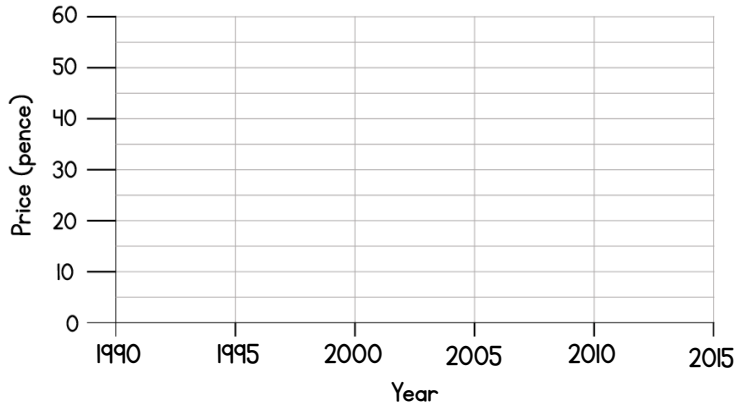
How many children want to go Go Karting?

2 marks

- 5 The information shows the change of the price of a bar of chocolate since 1990

Year	1990	1995	2000	2005	2010	2015
Price (pence)	15	20	30	30	45	60

Draw a line graph to show this data.



- 6 Eva records how many glasses of water she drinks each day.

Mon	Tues	Wed	Thurs	Fri	Sat	Sun
8	9	7	6	9	10	7

What is the mean number of glasses she drinks?

The following week, the mean number of glasses is 10

How many more glasses of water did she drink in the following week?



2 marks



1 mark



2 marks

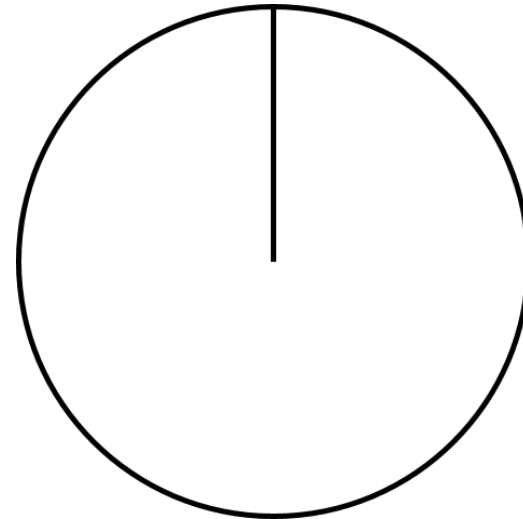
- 7 60 people were asked to choose their favourite pizza topping. Complete the table.

Pizza topping	Number of people	Degrees
Vegetable	12	72
Cheese	9	
Pepperoni	18	108
Other	21	126
Total	60	



2 marks

Show the results in the pie chart.



2 marks

Circle how confident you feel with statistics.

1 2 3 4 5

Not
confident

Very
confident