

Mrs W's Maths 20 **ANSWERS**

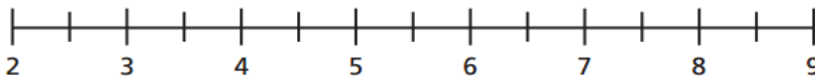
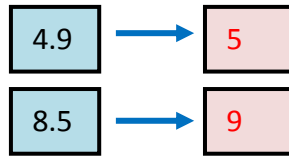
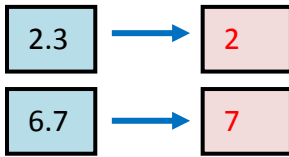
Rounding decimals REVISION part 2

Can you remember whether we round up or down when the last digit is a 5? **round up**

- 1 So, what is 25 rounded to the nearest 10? **30**
What is 45 rounded to the nearest 10? **50**
What is 95 rounded to the nearest 10? **100**



- 2 Round these decimals to the nearest whole number



Search ID: dpan1f
"We had decimals today and I think they've followed me home!"

- 3 Which of these numbers **round up** to the nearest whole number?
Circle your answers.

4.1 **2.8** **0.7** 12.3 **0.5** 99.3 **6.6** **78.5** 95.2

- 4 Which of these numbers **round down** to the nearest whole number?
Circle your answers.

3.8 5.5 **0.2** **18.1** 0.5 99.9 43.7 **82.2** **10.1**

- 5 Round these decimal numbers to the nearest whole number.

