
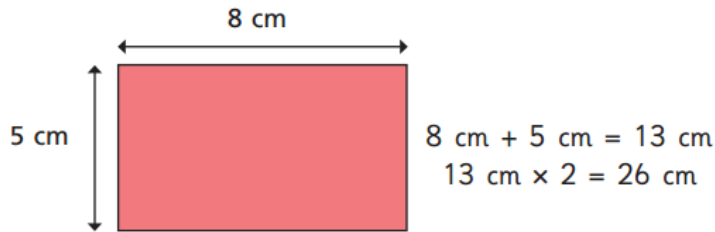


Mrs W's Maths 22
Perimeter of rectangles part 2

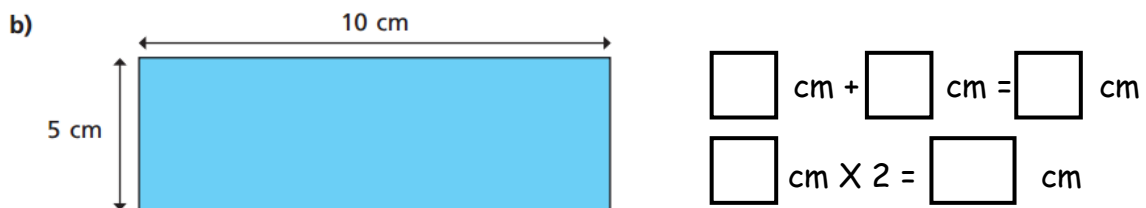
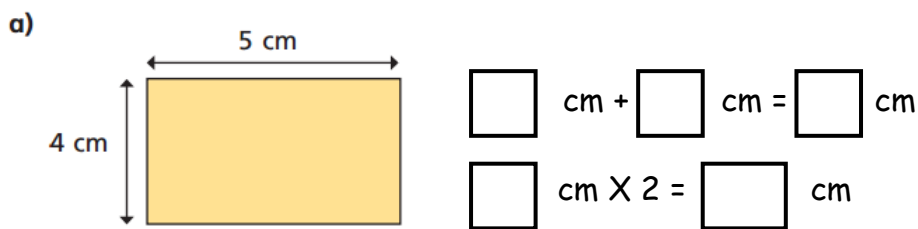


*REMEMBER perimeter is the distance around the edge of a 2D shape.
We can find it by adding up the lengths of all the sides.*

1 Bob has been worked out the perimeter of this rectangle.



Use Bob's method to work out the perimeter of these rectangles.



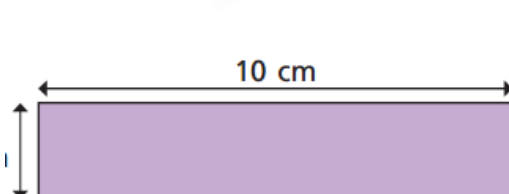
2 **Challenge** Each lolly stick is 8cm long. What is the perimeter of the rectangle.




3 **Challenge** Each of these rectangles has a perimeter of 24 cm.

Work

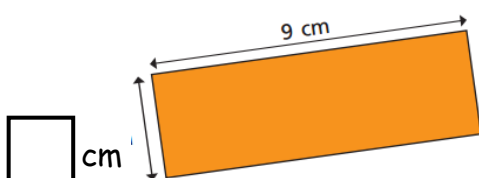
out the missing lengths.



cm



cm



cm