








Friday

Make your own shop and write tags for the items on sale. Then add the amounts to find the total your customers would spend on these items! Send us pictures of your shop and role play with your family – we love to see your home learning!

For Sale:

 Pencil 15p	 Mug £1 and 10p	 Teddy 50p
 Rubber 22p	 Book £2 and 25p	 Glue 43p
		 Socks £1 and 50p

What is the total cost of these items?

1)  and 

2)  and 



3)  and 

4)  and 

5)  and 

6)  and 

7)  and 

8)  and 

9) ,  and 

10) ,  and 

Remember to write and show your number sentences to work out the answers.

= _____ pounds and _____ pence
= £ _____ and _____ p