







Monday

Write the value of each of these coins and then work out the total amounts.

					
<input type="text" value="_ p"/>	<input type="text"/>	<input type="text"/>	<input type="text"/>	<input type="text"/>	<input type="text"/>

1)  =

2)  =

3)  =

4)  =








5)  =

6)  =

7)  =

Compare these amounts using > < or =

8)    

9)       

10) Miss Burnett had ten 5p coins in her hand. Miss Ellison-Smith has five 10p coins. Amy says Miss Burnett has more because she has more coins. Do you agree? Explain why.

I agree/disagree because...