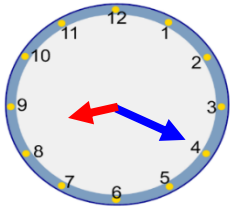


Monday – 20 past and 25 past

When the **minute hand** (longer hand) is pointing to the 4 it means 20 past.

When the **minute hand** is pointing to the 5 it means 25 past.

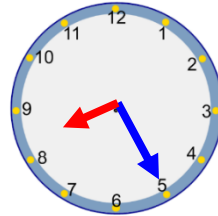
At 20 past and 25 past the **hour hand** (shorter hand) will be past the hour.



20 past

Minute hand is on the 4.

Hour hand is past the 8.



Ten past

Minute hand is on the 5.

Hour hand is past the 8.

1. Can you write the times that these clocks are showing?



25 past 7



20 past 11




20 past 12



25 past 2

2. At 7 o'clock Ali watches Go Jettters. It lasts 20 minutes.

What is the time now? 20 past 7



2. Sam says that the time is 5 past 9 because the minute hand is on the 5 and the hour hand is just past the 9.

What mistake has he made?

The mistake is when the minute hand is on the 5 it means 25 past not 5 past

