
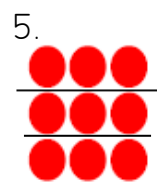
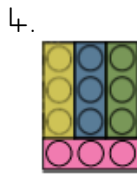
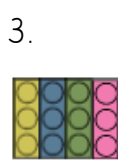
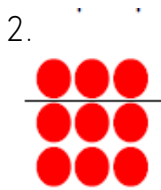
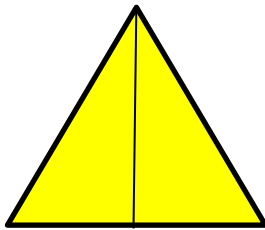


Tuesday – equal parts

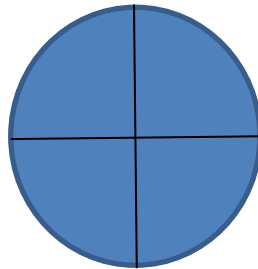
Write down the numbers of the wholes that have been split into equal parts.



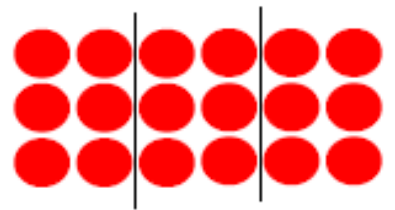
2. How many equal parts are shown in each picture?



There are _____ equal parts.



There are _____ equal parts.



There are _____ equal parts.

3. Complete the sentences...



There are _____ equal groups. Each group has _____ cakes.

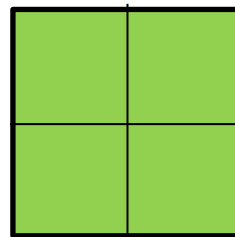
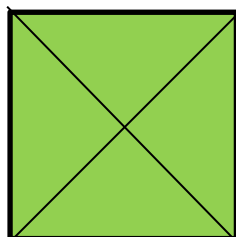


There are _____ equal groups. Each group has _____ child.

4. Two children were given a square to split into 4 equal parts.



Zameer



Zena

Who do you agree with? I agree with _____ because ...

Tuesday – equal parts