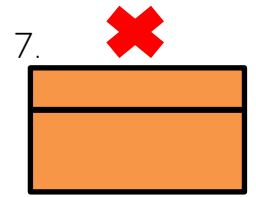
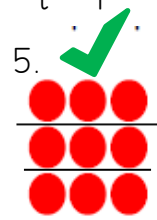
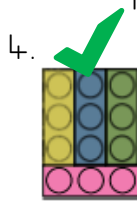
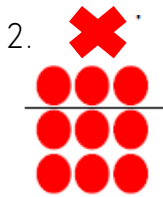

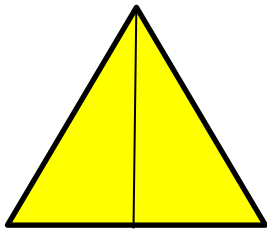


## Tuesday answers – equal parts

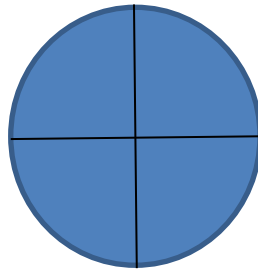
Write down the numbers of the wholes that have been split into equal parts.



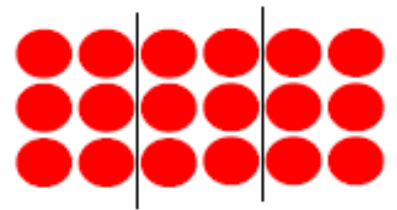
2. How many equal parts are shown in each picture?



There are 2 equal parts.



There are 4 equal parts.



There are 3 equal parts.

3. Complete the sentences...



There are 3 equal groups. Each group has 2 cakes.



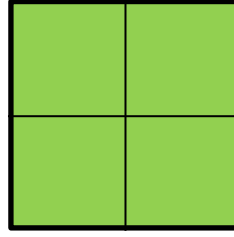

There are 5 equal groups. Each group has 1 child.

## Tuesday answers – equal parts

4. Two children were given a square to split into 4 equal parts.



Zameer



Zena

Who do you agree with? I agree with both of them because both squares have been split into four equal parts just in different ways!