

Thursday – quarter past

When the **minute hand** (longer hand) is pointing to the 3 it means quarter past. At quarter past the **hour hand** (shorter hand) will be just past the hour.

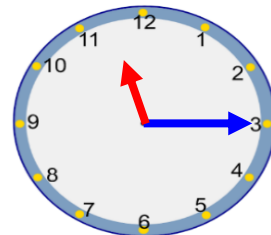


Quarter past


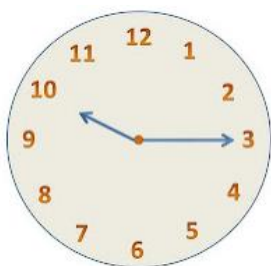
The **minute hand** is on the 3.
The **hour hand** is just past the 8.
The time is **quarter past 8**.

1. Can you complete the sentences?

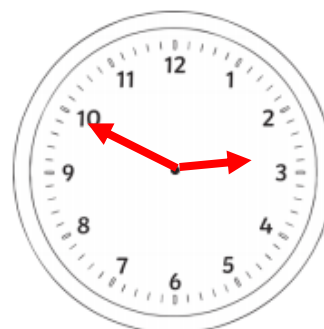
The **hand** is on the . The **hour** is past the .
The time is .



2. Can you write the times that the clocks are showing?



2. Sally says the time is quarter past 10. What mistake has she made? **The mistake is...**



4. Can you write the times these clocks are showing? Look carefully!

