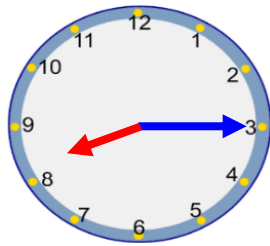


## Thursday – quarter past

When the **minute hand** (longer hand) is pointing to the 3 it means quarter past. At quarter past the **hour hand** (shorter hand) will be just past the hour.

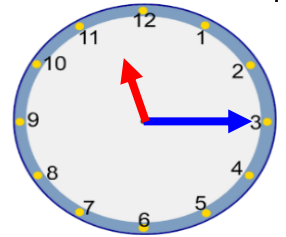


### Quarter past

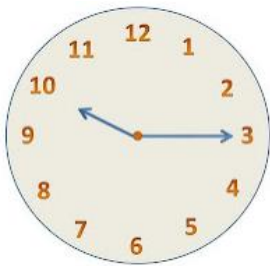
The **minute hand** is on the 3.  
The **hour hand** is just past the 8.  
The time is **quarter past 8**.

1. Can you complete the sentences?

The **minute hand** is on the 3. The **hour hand** is past the 11.  
The time is **quarter past 11**.



2. Can you write the times that the clocks are showing?



quarter past 10



quarter past 12



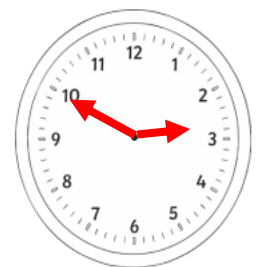
quarter past 8



quarter past 2

2. Sally says the time is quarter past 10. What mistake has she made?

The mistake is she has got the hands the wrong way round. The minute hand should be pointing to the 3 not 10.



4. Can you write the times these clocks are showing? Look carefully!



3 o'clock



half past 4



quarter past 2



quarter past 7