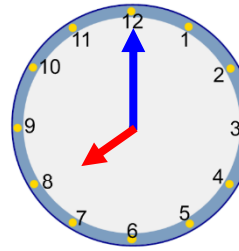



Tuesday – o'clock


When the **minute hand** (longer hand) is pointing to the 12 it means o'clock. The **hour hand** (shorter hand) tells you what hour it is.




Minute hand is on the 12.
Hour hand is on the 8.
The time is 8 o'clock.

Can you match the times to the clocks?

1  9 o'clock

2  Two o'clock

3  5 o'clock

4. What are the times on these clocks?



12 o'clock



7 o'clock



10 o'clock

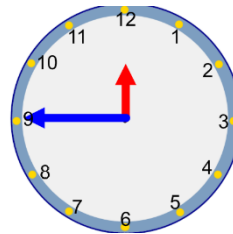


3 o'clock

5. What is Miss Ellison-Smith's mistake? The mistake is Miss Ellison-Smith has mixed up the hands. The minute hand should be pointing at the 12 not the 9.



My clock says 9 o'clock.



6. Oh no! The hour hand has been covered up!
What possible times could the clock be showing?
The time could be 6 o'clock, 7 o'clock, 8 o'clock, 9 o'clock, 10 o'clock, 11 o'clock and maybe even 12 o'clock!

