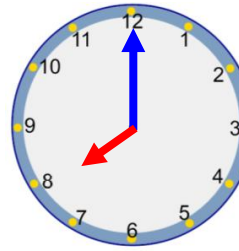


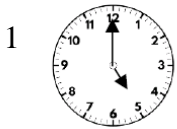
Tuesday – o'clock

When the **minute hand** (longer hand) is pointing to the 12 it means o'clock. The **hour hand** (shorter hand) tells you what hour it is.

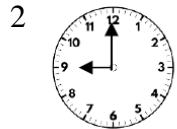


Minute hand is on the 12.
Hour hand is on the 8.
The time is 8 o'clock.

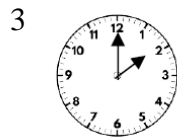
Can you match the times to the clocks?



9 o'clock



Two o'clock



5 o'clock

4. What are the times on these clocks?



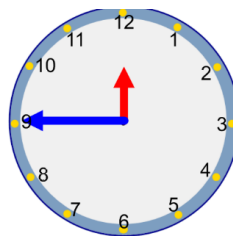
___ o'clock



5. What is Miss Ellison-Smith's mistake? *The mistake is...*



My clock says 9 o'clock.



6. Oh no! The hour hand has been covered up!
What possible times could the clock be showing?

The time could be...

