

## Wednesday answers – half

A half

1  
—  
2

The top number tells you how many of the parts you need.

The bottom number tells you how many parts the whole is split into.



1. Complete these sentences.

The whole is split into 2 equal parts.

Each part is called a half.

We show this with the fraction  $\frac{1}{2}$



2. Write the numbers of the shapes which show  $\frac{1}{2}$

1. ✗

2. ✗

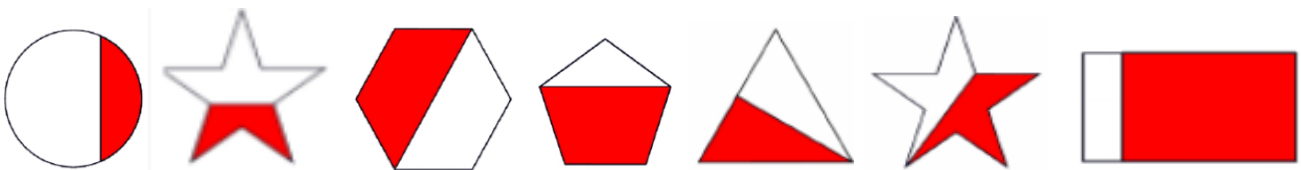
3. ✓

4. ✗


5. ✓

6. ✓

7. ✗

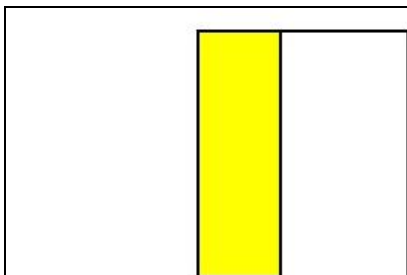


3. Here is a running track. Vicky runs **half** way and stops. Which coloured line shows where she stopped?

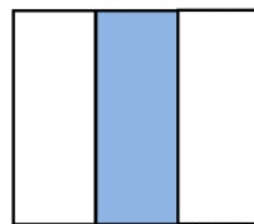


The green line shows where she stopped.

4. Zameer and Sue tried to halve some shapes. What mistakes have they made?



Zameer's mistake is the parts are not equal.



Sue's mistake is she split the whole into 3 equal parts not 2.

Wednesday answers – half