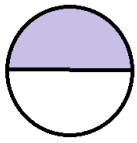
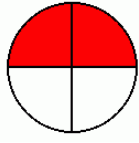


Wednesday


1) Write the fractions that have been shaded below.



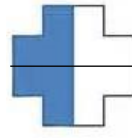
—




—



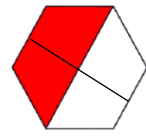
—



—

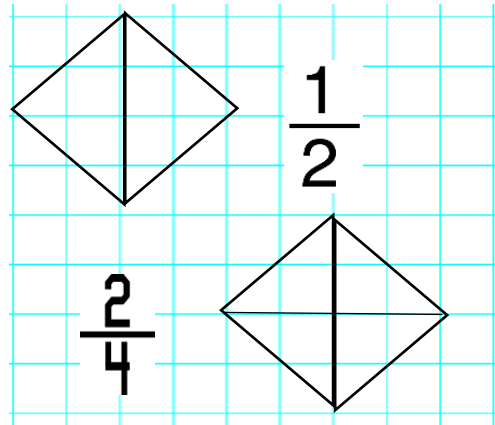
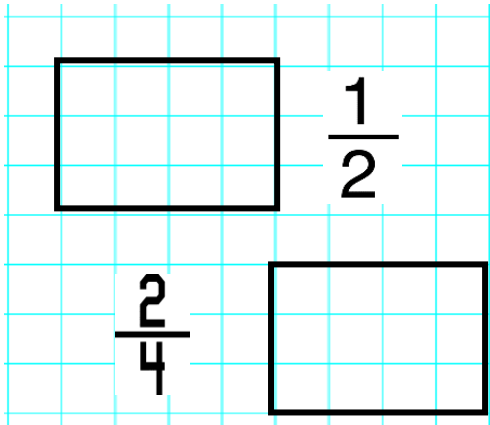


—



—

2) Shade the fraction of these shapes given.



b) What do you notice? I notice that...

Do you agree? Explain your reasoning.

I agree/disagree because...

I have shaded $\frac{2}{2}$ of the shape.



Compare these amounts using the sentence stem. **Remember to work out each answer first.**

There are several possible ways of completing the sentence stem. How many can you find?

$\frac{2}{4}$ of 12

$\frac{1}{3}$ of 12

$\frac{1}{2}$ of 12

_____ is equal to/less than/more than _____