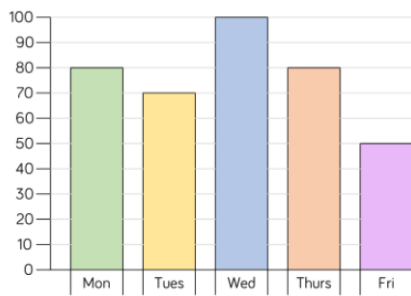


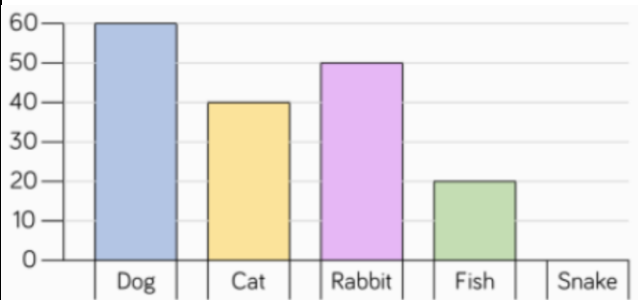
Thursday 4th June 2020 – Maths

1. This bar chart shows how many children attend after school clubs.



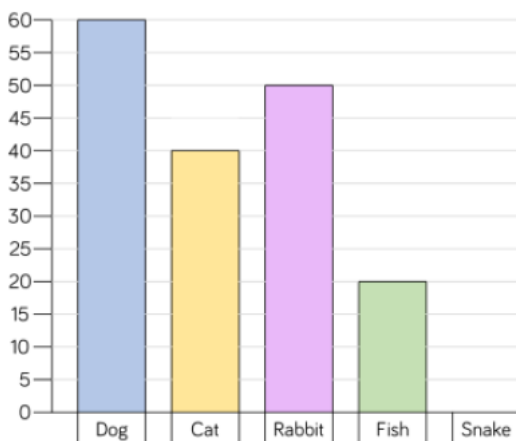
- Look at the side. What jumps is the scale going in?
- Which day is the most popular?
- Which day is the least popular?
- How many children attend on Thursday and Friday?

2. Miss Davis made a bar chart about children and their pets.



- How many children have a pet snake?
- How many children have a cat?
- Does the chart tell you if the children have more than one pet?
- How many rabbits and cats are there in total?

3. Miss Goldsack also made a bar chart about children and their pets.



- What's different?
- Who found more cats, Miss Davis or Miss Goldsack?
- Which bar chart was more efficient?
Remember efficient means the quickest way to get the best answer.

In your book, have a go at using this information to draw a bar chart or a pictogram. Which way is more suitable?

Child	Number of Skips in 30 Seconds
Teddy	12
Annie	15
Whitney	17
Ron	8

Level
2