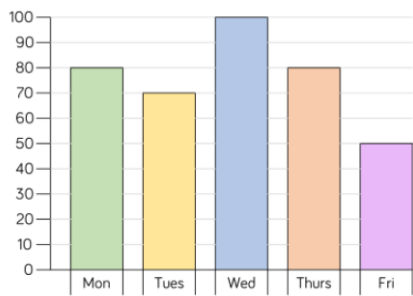


## Thursday 4<sup>th</sup> June 2020 – Maths *Answers*

1. This bar chart shows how many children attend after school clubs.



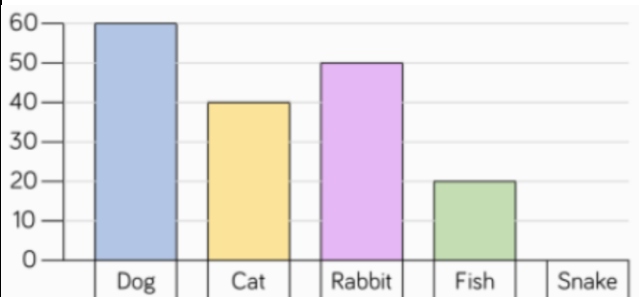
a) Look at the side. What jumps is the scale going in? *10*

b) Which day is the most popular? *Wednesday*

c) Which day is the least popular? *Friday*

d) How many children attend on Thursday and Friday?  
*130*

2. Miss Davis made a bar chart about children and their pets.



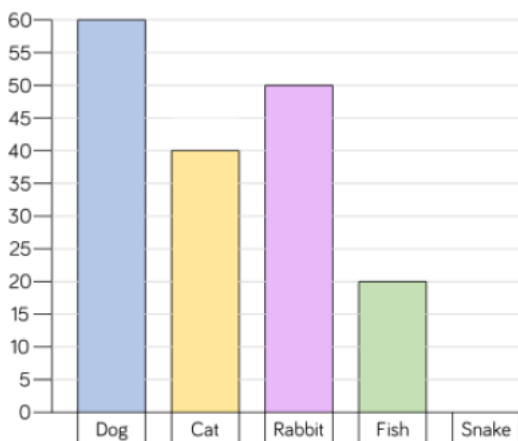
a) How many children have a pet snake? *0*

b) How many children have a cat? *40*

c) Does the chart tell you if the children have more than one pet? *No*

d) How many rabbits and cats are there in total? *90*

3. Miss Goldsack also made a bar chart about children and their pets.



a) What's different? *Jumping up in 5s.*

b) Who found more cats, Miss Davis or Miss Goldsack? *They both have 40*

c) Which bar chart was more efficient?  
*Miss Davis because all of the results went up in 10s not 5s so Miss Goldsack didn't need to jump in 5s.*