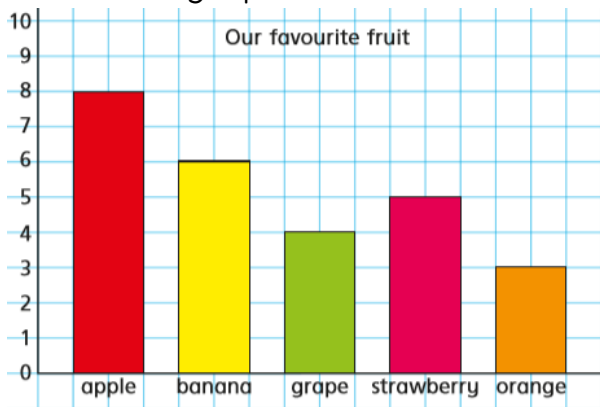
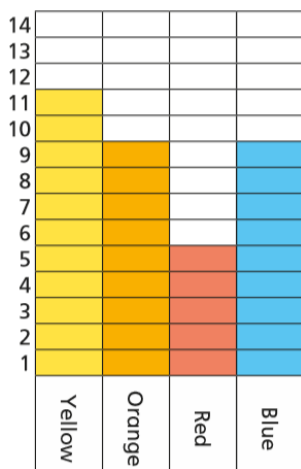


1. This graph shows the children's favourite fruits in Year 3.



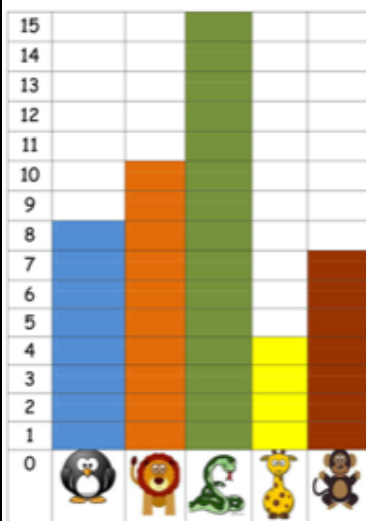
- Which fruit is the most popular? **apples**
- Which fruit is the least popular? **oranges**
- How many children like either grapes or oranges? **7**

2. This graph shows the children's favourite colours in Year 3.



- Which colours have an equal amount of liking?
Orange and blue
- What is the difference between the most popular and least popular colours? **6**
- How many children were asked the question 'What is your favourite colour?' **34**

3. This graph shows how many of each type of animal there are at a zoo.



- How many more snakes are found at the zoo than monkeys? **8**
- What is the difference between the number of giraffes and penguins? **4**
- How many animals are there in the zoo altogether? **44**

In your book, have a go at using this information to draw a bar chart. Look at the ones on this page to help you. Don't forget to write a title for it!

	Lolly pops	Skittles	Fruit pastels	Starburst	Haribo
Number of children who prefer...	8	6	2	4	7