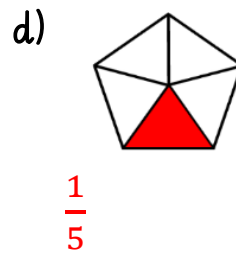
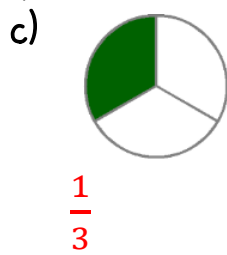
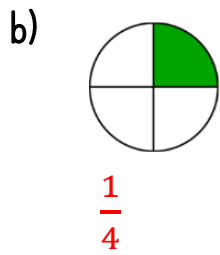
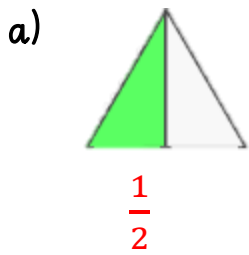





Monday 8th June-Maths

1. What fractions of these shapes are shaded?



2. Draw some counters and complete the following:



3. Find the following fractions of amounts. Draw groups in your book or use counters if you need to.

a) $\frac{1}{5}$ of 20 = 4

b) $\frac{1}{6}$ of 30 = 5

c) $\frac{1}{4}$ of 28 = 7

4. Use < > or = to fill in the circles.

$\frac{1}{3}$ of 27 $\frac{1}{4}$ of 36

$\frac{1}{6}$ of 36 $\frac{1}{2}$ of 24

5. Hanna and Jack have 48 smarties. Hannah ate $\frac{1}{8}$ of the smarties and Jack ate $\frac{1}{4}$ of the smarties. How many smarties do they have left? 30

6. Joe and Emma went shopping. They had £60.00 between them. Joe spent $\frac{1}{5}$ of the money and Emma spent $\frac{1}{3}$ of the money.

Who spent the most money? Emma How much money did they have left? £28.00

There 80 sweets in a bag. Miss Davis takes $\frac{1}{8}$ of the sweets, Miss Malik takes $\frac{1}{10}$ and Miss Goldsack takes $\frac{1}{5}$ of the sweets.

a) Who takes the least amount of sweets? Miss Malik

b) Who takes the most amount of sweets? Miss Davis

c) How many sweets are left? 46

Level
2