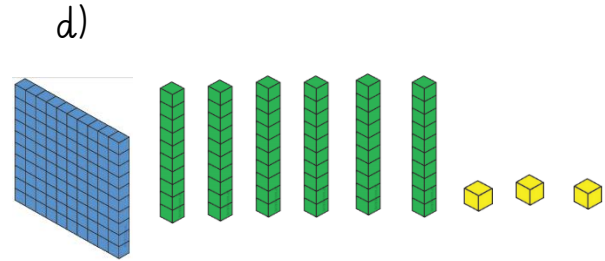
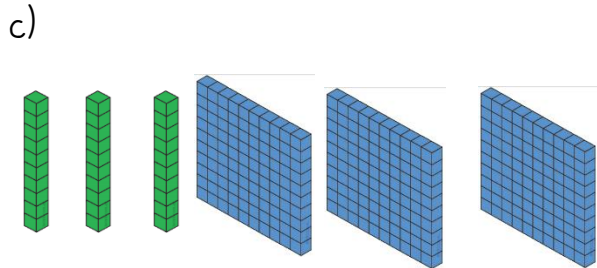
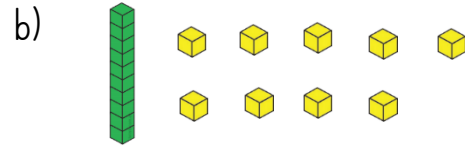
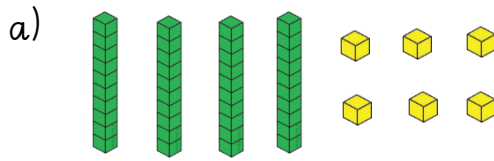


1. The dienes are showing numbers. What numbers do they represent?



2. Write the value of the red digit in each number:

a) 329

d) 890

g) 999

b) 92

e) 27

h) 012

c) 109

f) 124

i) 1001

3. Write these numbers:

a) Has 3 tens, 4 ones, and 0 hundreds

b) Has 4 hundreds, 5 ones and 2 tens

c) Has 18 tens and 2 ones

d) Has 12 ones and 1 hundred

4. Put these numbers from smallest to biggest:

901

1091

910

109

190

smallest





3

8

9

1

Level

2

a) Choose 3 of these numbers to make an even number that is greater than 400.

b) Choose 3 numbers to make the smallest number you can.

c) Choose 3 numbers to make the biggest number you can.