



# Tuesday 16<sup>th</sup> June-Maths

1. What number is represented?

Tens	Ones
	

The number represented is 82

a) What is 10 more than the number? 92

b) What is 1 more than the number? 83

c) What is 10 less than the number? 72

d) What is 1 less than the number? 81

2. What is 10 more than and 10 less than each of these numbers?

a) 79

89
69

c) 88

98
78

e) 116

126
106

b) 86

96
76

d) 107

117
97

f) 123

133
113

3. Use mental maths to complete the following sums:

a)  $22 + 30 =$  52

b)  $15 +$  70  $= 85$

c)  $49 - 20 =$  29

d)  $20 + 43 =$  63

e)  $76 - 40 =$  36

f) 135  $- 15 = 120$

g)  $95 + 50 =$  145

h) 128  $- 20 = 108$

4. Use column method for these addition questions:

	5	7
+	1	2

a)  $35 + 42 =$  77

e)  $36 - 12 =$  24

b)  $86 + 13 =$  99

f)  $58 - 24 =$  34

c)  $45 + 37 =$  82

g)  $76 - 59 =$  17

d)  $95 + 45 =$  140

h)  $89 - 44 =$  45





5. Fill in the blanks with  $<$ ,  $>$  or  $=$

a)  $30 + 60$  <  $50 + 80$     b)  $69 + 31$  =  $57 + 43$     c)  $95 + 45$  >  $70 + 50$

d)  $55 - 25$  <  $70 - 35$     e)  $105 - 15$  >  $110 - 35$     f)  $145 - 30$  =  $150 - 35$

6. Ava has 89 sweets in a bag. She adds another 10 sweets to her bag. Ava eats 10 sweets after lunch, 11 sweets 3 hours later and another 10 sweets after dinner. How many sweets does she have left? 68

Tens	Ones
	

Sara



The place value grid shows the number 74.

Is Sara correct? Explain your reasoning.

What do you notice about the number shown?

Sara is incorrect because there are 4 tens in the tens column and 7 ones in the ones column. Therefore the number represented is 47 and not 74.

Level  
**2**