



Tuesday 16th June-Maths

1. What number is represented?

Tens	Ones
	

The number represented is

a) What is 10 more than the number?

b) What is 1 more than the number?

c) What is 10 less than the number?

d) What is 1 less than the number?

2. What is 10 more than and 10 less than each of these numbers?

a) 79

c) 98

e) 116

b) 86

d) 107

f) 123

3. Use mental maths to complete the following sums:

a) $22 + 30 =$

b) $15 + \square = 85$

c) $49 - 20 =$

d) $20 + 43 =$

e) $76 - 40 =$

f) $\square - 15 = 115$

g) $95 + 50 =$

h) $\square - 20 = 108$

4. Use column method for these calculations:

	5	7
+	1	2

a) $35 + 42$

b) $86 + 13$

c) $45 + 37$

d) $95 + 45$

e) $36 - 12$

f) $58 - 24$

g) $76 - 59$

h) $89 - 44$



5. Fill in the blanks with $<$, $>$ or $=$

a) $30 + 60 \bigcirc 50 + 80$

b) $69 + 31 \bigcirc 57 + 43$



c) $95 + 45 \bigcirc 70 + 50$

d) $55 - 25 \bigcirc 70 - 35$

e) $105 - 15 \bigcirc 110 - 35$

f) $145 - 30 \bigcirc 150 - 35$

6. Ava has 89 sweets in a bag. She adds another 10 sweets to her bag. Ava eats 10 sweets after lunch, 11 sweets 3 hours later and another 10 sweets after dinner. How many sweets does she have left?

Tens	Ones
	

Sara



The place value grid shows the number 74.

Is Eva correct? Explain your reasoning.

What do you notice about the number shown?

Level
2