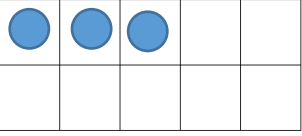
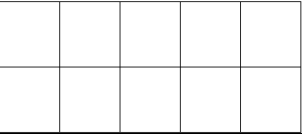
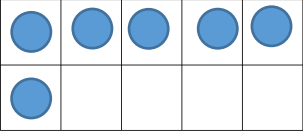
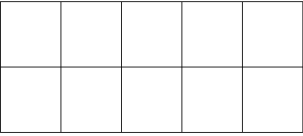
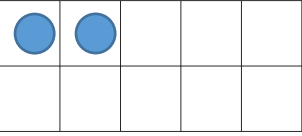
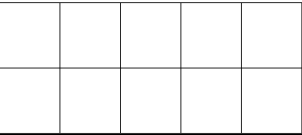
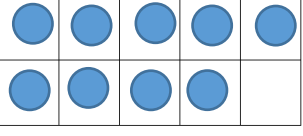
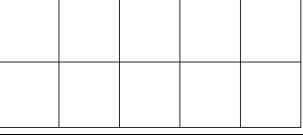
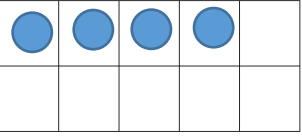
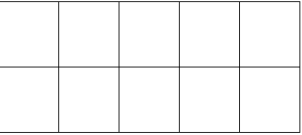
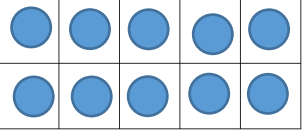
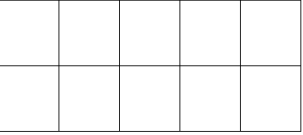


14.05.20

LO: to be able to add by counting on using a ten frame.

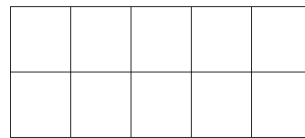
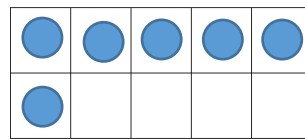
  $+ 6 = \underline{\quad}$	  $+ 10 = \underline{\quad}$
  $+ 9 = \underline{\quad}$	  $+ 5 = \underline{\quad}$
  $+ 8 = \underline{\quad}$	  $+ 4 = \underline{\quad}$

First I had 6 counters.

Then I added 7 more.

How many do I have now?

$$\underline{\quad} + \underline{\quad} = \underline{\quad}$$



First I had 8 counters.

Then I added 9 more.

How many do I have now?

$$\underline{\quad} + \underline{\quad} = \underline{\quad}$$

